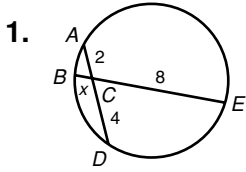


**LESSON**

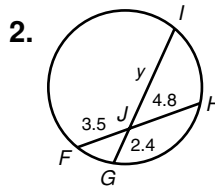
**Practice B**

**11-6 Segment Relationships in Circles**

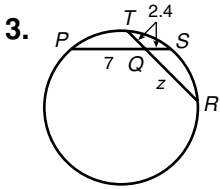
Find the value of the variable and the length of each chord.



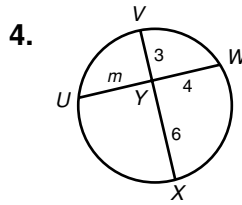
\_\_\_\_\_



\_\_\_\_\_

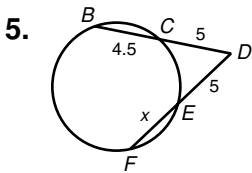


\_\_\_\_\_

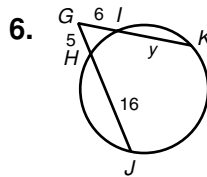


\_\_\_\_\_

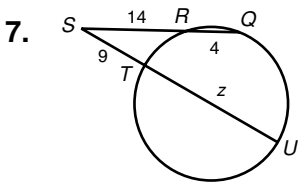
Find the value of the variable and the length of each secant segment.



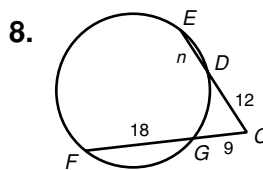
\_\_\_\_\_



\_\_\_\_\_

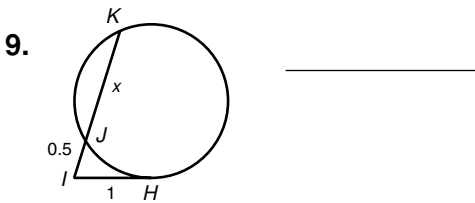


\_\_\_\_\_

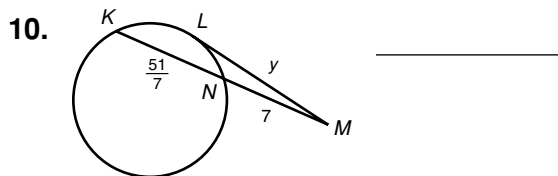


\_\_\_\_\_

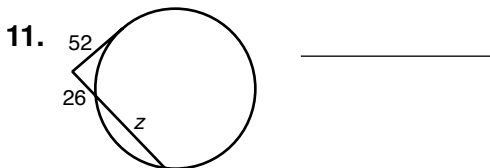
Find the value of the variable. Give answers in simplest radical form if necessary.



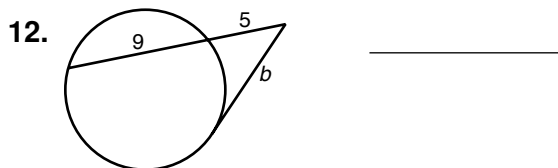
\_\_\_\_\_



\_\_\_\_\_



\_\_\_\_\_



\_\_\_\_\_